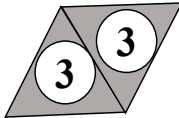
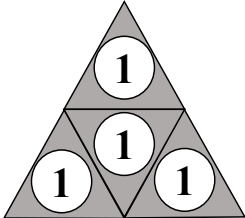
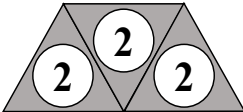
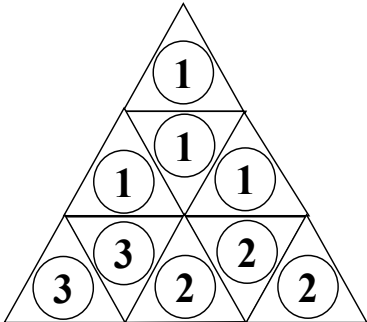
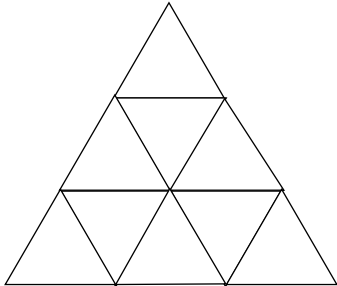


Answers-Lesson 2

Answers to 'Spatial Orientation' Exercise



Answers: Attention to Detail



# of triangles  
13

Challenge your attention to detail.

Count the number of TOTAL triangles and write your answer in the space provided.